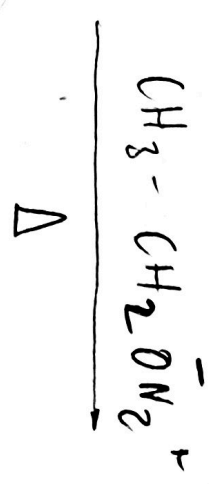
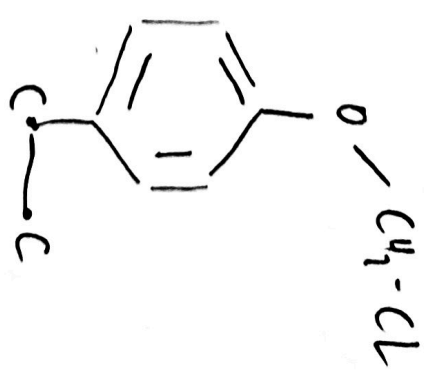
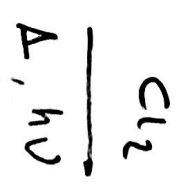
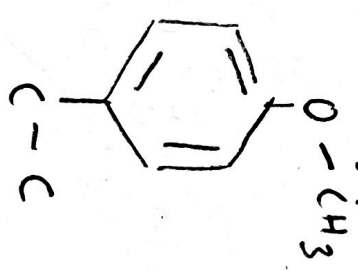
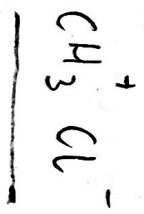
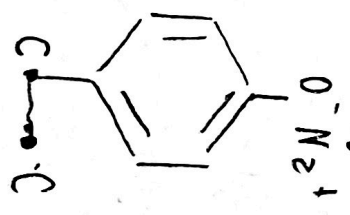

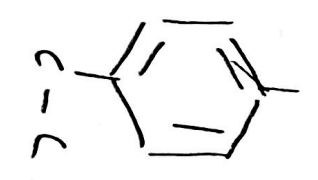


b) Formular los compuestos orgánicos que se forman en las siguientes reacciones consecutivas a partir de 4-etilfenol: i) hidróxido sódico, ii) cloruro de metilo, luz y calor, iv) etóxido sódico y calor, v) ácido bromhídrico y peróxidos.



no hay reacción?

